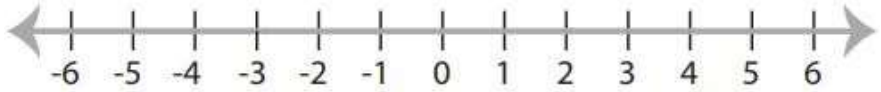


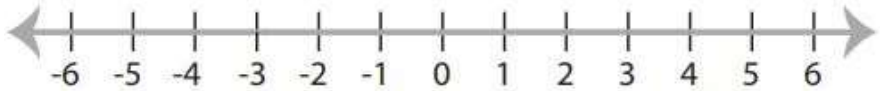
One-Step Inequalities

 Find the answer for each inequality and graph it.

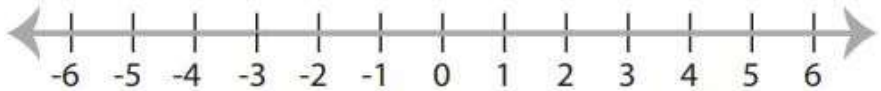
1) $x + 4 \geq 4$



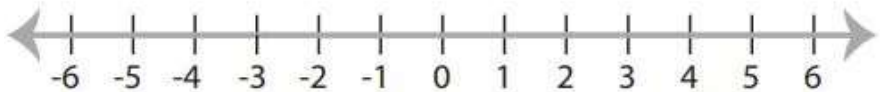
2) $x - 5 \leq 2$



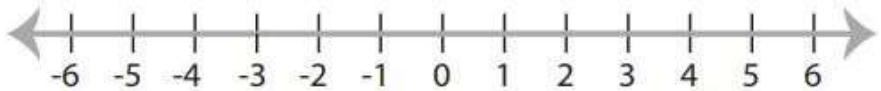
3) $5x > 35$



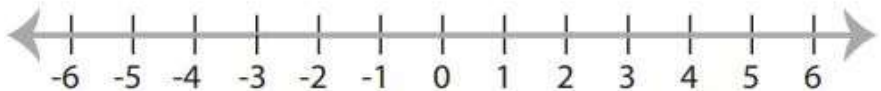
4) $9 + x \leq 11$



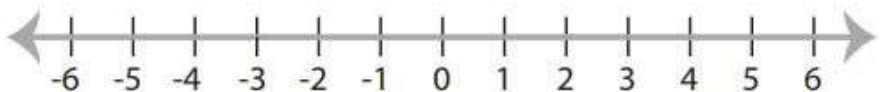
5) $x - 5 < -9$



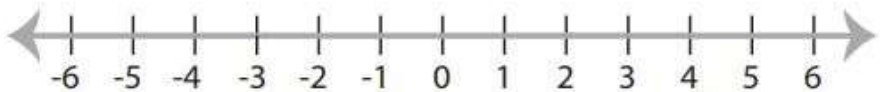
6) $9x \geq 72$



7) $9x \leq 27$



8) $x + 19 > 16$



Answers of Worksheets

One-Step Inequalities

