
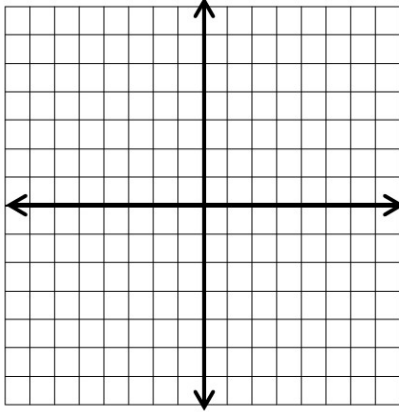


Math Worksheets

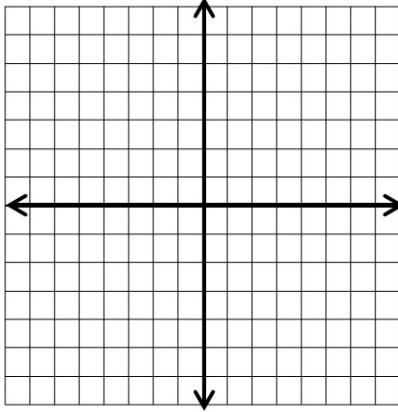
Graphing Linear Inequalities

 Sketch the graph of each linear inequality.

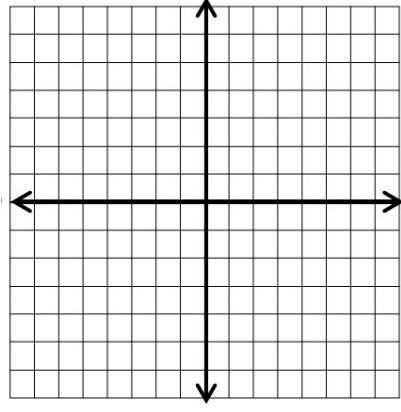
1) $y > 4x - 5$



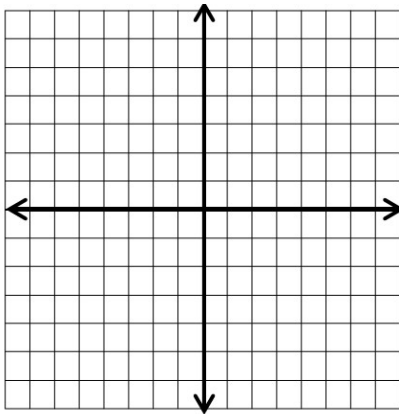
2) $y < 2x + 4$



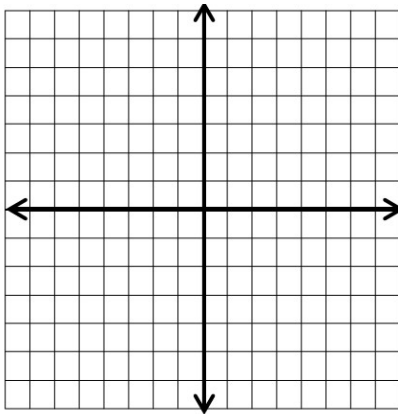
3) $y \leq -5x - 2$



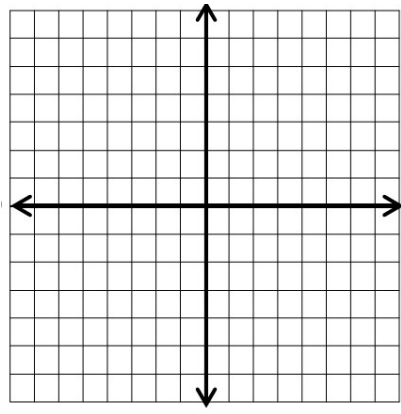
4) $4y \geq 12 + 4x$



5) $-12y < 3x - 24$



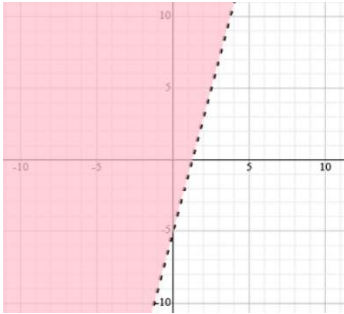
6) $5y \geq -15x + 10$



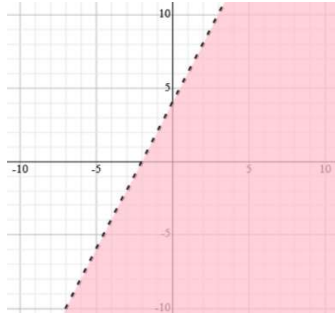
Answers of Worksheets

Graphing Linear Inequalities

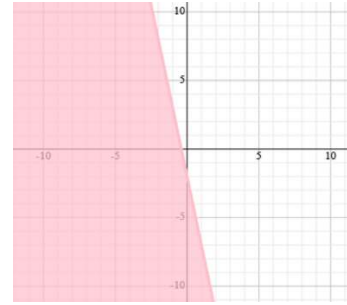
1) $y > 4x - 5$



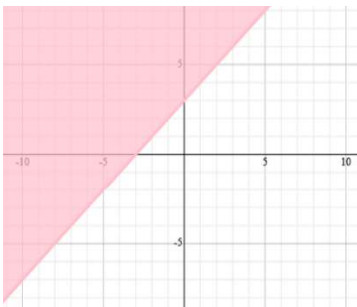
2) $y < 2x + 4$



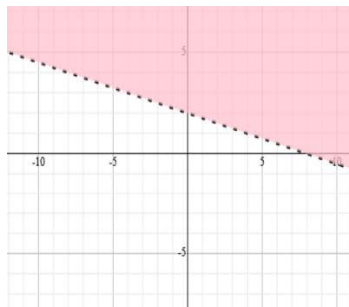
3) $y \leq -5x - 2$



4) $4y \geq 12 + 4x$



5) $-12y < 3x - 24$



6) $5y \geq -15x + 10$

